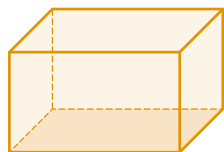
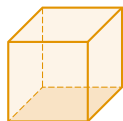


Geometriska kroppar

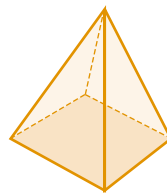
Bilderna visar olika geometriska kroppar. En kropp har volym.



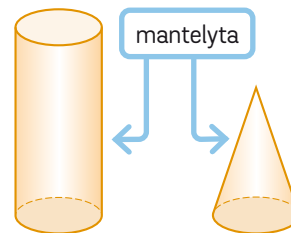
Rätblock



Kub





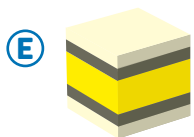
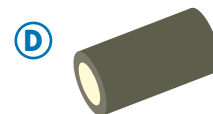
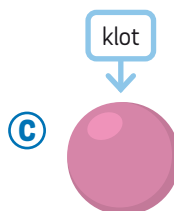

Pyramid



Cylinder

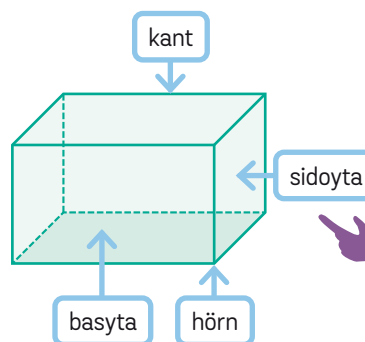
Kon

26 Vilken geometrisk kropp visar bilden?



27 Hur många

- a) hörn har rätblocket
- b) sidoytor har rätblocket
- c) kanter har rätblocket



I ett rätblock är det räta vinklar mellan kanterna.



28 I vilken eller vilka av de geometriska kropparna i rutan högst upp på sidan är någon sidoyta en

- a) kvadrat
- b) rektangel
- c) triangel
- d) cirkel